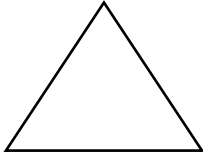
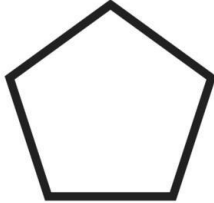
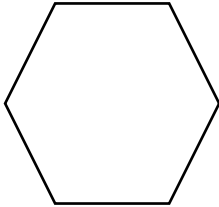
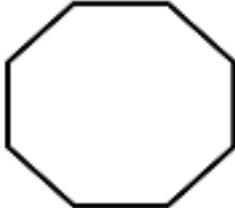



Subject- Computer

Class- Vth

Ch-6 (Worksheet)

Q1. Write name of the given polygons: -

a)		<hr/>
b)		<hr/>
c)		<hr/>
d)		<hr/>
e)		<hr/>

Q2) Fill in the blanks:-

- a) To run a script, you click on _____ button.
- b) The Pen blocks are _____ in colour.
- c) To draw a square, we change the value of the repeat block to _____.
- d) To draw a Triangle, we change the value of the repeat block to _____.
- e) Octagon has _____ sides.
- f) To draw a hexagon, we change the value of the repeat block to _____.
- g) Nonagon has _____ sides.

Q3. Complete the below statement: -

To add Pen blocks, _____ on the
_____ button at the bottom
_____ corner of the _____ tab. Click on
_____ option. The _____ blocks are
added to the _____ tab.